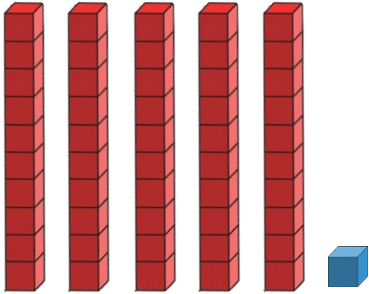


# Place Value

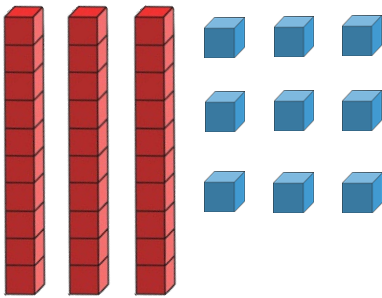
Name: \_\_\_\_\_ Date: \_\_\_\_\_

Write how many groups of tens and ones there are.



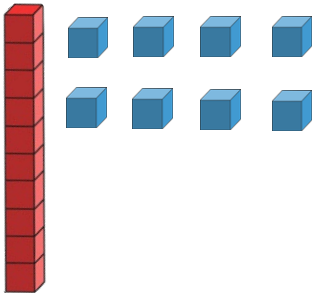
\_\_\_\_\_ tens \_\_\_\_\_ one

\_\_\_\_\_ + \_\_\_\_\_ = \_\_\_\_\_



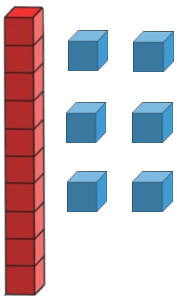
\_\_\_\_\_ tens \_\_\_\_\_ ones

\_\_\_\_\_ + \_\_\_\_\_ = \_\_\_\_\_



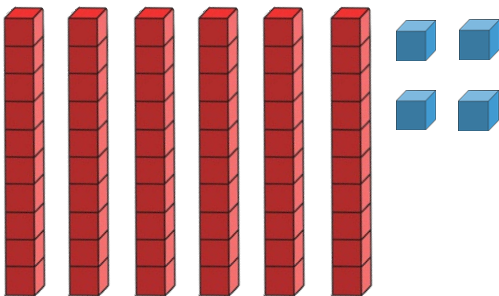
\_\_\_\_\_ ten \_\_\_\_\_ ones

\_\_\_\_\_ + \_\_\_\_\_ = \_\_\_\_\_



\_\_\_\_\_ ten \_\_\_\_\_ ones

\_\_\_\_\_ + \_\_\_\_\_ = \_\_\_\_\_



\_\_\_\_\_ tens \_\_\_\_\_ ones

\_\_\_\_\_ + \_\_\_\_\_ = \_\_\_\_\_