



## Homework

### Year 3 Thursday 5<sup>th</sup> June

Please complete and return work completed in your homework book on Tuesday.

Dear Parents,

Please see below for homework this week.

Please remember:

- Reading Records to be in every day. They will be changed once a week. Please listen to them read and sign the Reading Record.
- Please remember to put your name in your uniform as we already have some lost jumpers and cardigans.
- Please can you check your child's pencil case to see if they need new pencils or glue.

Thank you for your continued support.

Ms Rowntree

### Maths

<p><b>Section 1</b> Write this multiplication statement as a division statement. <math>3 \times 4 = 12</math></p> <input type="text"/>	<p><b>Section 2</b> Calculate: <math>90 - \square = 50</math> <math>30 - \square = 20</math></p>	<p><b>Section 3</b> Double these numbers.</p> <p>9     <input type="text"/></p> <p>3     <input type="text"/></p> <p>7     <input type="text"/></p>	<p><b>Section 4</b> Omar has 86p He spends 35p. How much does he have left?</p> <input type="text"/>
<p><b>Section 5</b> It is 8:30am. It takes Yang 25 minutes to walk to school. What time will he arrive?</p> <input type="text"/>	<p><b>Section 6</b> On a school trip, 24 children are put into three groups. How many children will there be in each group?</p> <input type="text"/>	<p><b>Section 7</b> Find half of these numbers:</p> <p>100     <input type="text"/></p> <p>40     <input type="text"/></p> <p>20     <input type="text"/></p>	<p><b>Section 8</b> A hat costs £24. It is now in a half price sale. How much will it cost?</p> <input type="text"/>




























## Forest School Week

As it is Forest School Week, please go outside (if the weather is nice!) and see what you can find on a nature walk.

# Nature Walk Scavenger Hunt

Mark each item as you find it. Can you find five in a row?

worm  <input type="checkbox"/>	leaf  <input type="checkbox"/>	insect  <input type="checkbox"/>	grass  <input type="checkbox"/>	flower  <input type="checkbox"/>
twig  <input type="checkbox"/>	bush  <input type="checkbox"/>	rocks  <input type="checkbox"/>	bird  <input type="checkbox"/>	squirrel  <input type="checkbox"/>
river  <input type="checkbox"/>	field or meadow  <input type="checkbox"/>	tree  <input type="checkbox"/>	cloud  <input type="checkbox"/>	spider  <input type="checkbox"/>
dirt  <input type="checkbox"/>	ant  <input type="checkbox"/>	butterfly  <input type="checkbox"/>	mushroom  <input type="checkbox"/>	dew  <input type="checkbox"/>
web  <input type="checkbox"/>	breeze  <input type="checkbox"/>	branch  <input type="checkbox"/>	nest  <input type="checkbox"/>	stones  <input type="checkbox"/>