




Number Bonds of 10 Ten-Frame Activity



$$\boxed{6} + \boxed{4} = \boxed{}$$




$$\boxed{5} + \boxed{5} = \boxed{}$$




$$\boxed{1} + \boxed{9} = \boxed{}$$



$$\boxed{8} + \boxed{} = \boxed{10}$$




$$\boxed{3} + \boxed{} = \boxed{10}$$

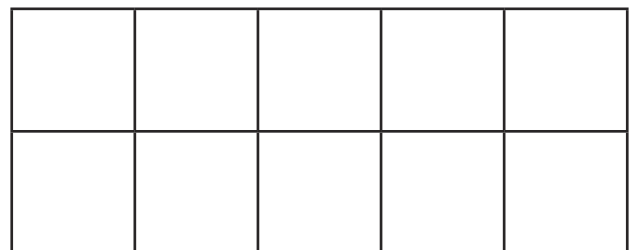


$$\boxed{} + \boxed{6} = \boxed{10}$$

Can you create your own?



$$\boxed{} + \boxed{} = \boxed{10}$$



$$\boxed{} + \boxed{} = \boxed{}$$