


Question 1/8 ✓


Score: 1

How many castles can you see? 

8

Question 2/8 ✓

Score: 1

How many fairies can you see? 

5

Question 3/8 ✓

Score: 1

How many magic lamps can you see? 

11

Question 4/8 ✓

Score: 1

How many baby bears can you see?



4

Question 5/8 ✓

Score: 1

How many dragons can you see?



9

Question 6/8 ✓

Score: 1


How many knights can you see?



1

Question 7/8 ✓


Score: 1

How many princesses can you see? 

12

Question 8/8 ✓

Score: 1

How many gingerbread men can you see? 

3