

Question 1/10 ✓

Score: 1

What is the missing number? $5 = 3 + ?$ ▲▲▲▲

Options (please check correct answers)

- 1
- 2
- 3

Question 2/10 ✓

Score: 1

What is the missing number? $5 = 4 + ?$ ▲▲▲▲

Options (please check correct answers)

- 1
- 2
- 3

Question 3/10 ✓

Score: 1

What is the missing number? $5 = 2 + ?$ ▲▲▲▲

Options (please check correct answers)

- 1
- 2
- 3

Question 4/10 ✓


Score: 1

What is the missing number? $5 = 1 + ?$ ▲▲▲▲

Options (please check correct answers)

- 1
- 4
- 3


Question 5/10 ✓**Score: 1**

What is the missing number? $10 = 5 + ?$ 

Options *(please check correct answers)*

- 5
- 4
- 6


Question 6/10 ✓**Score: 1**

What is the missing number? $10 = 8 + ?$ 

Options *(please check correct answers)*

- 5
- 4
- 2


Question 7/10 ✓**Score: 1**

What is the missing number? $10 = 7 + ?$ 

Options *(please check correct answers)*

- 5
- 3
- 2

Question 8/10 ✓**Score: 1**

What is the missing number? $10 = 6 + ?$ 

Options *(please check correct answers)*

- 5
- 3
- 4

Question 9/10 ✓

Score: 1

What is the missing number? $10 = 1 + ?$ ▲▲▲▲

Options *(please check correct answers)*

- 9
- 3
- 4

Question 10/10 ✓

Score: 1

What is the missing number? $10 = 2 + ?$ ▲▲▲▲

Options *(please check correct answers)*

- 9
- 3
- 8